

FOR OFFICIAL USE



National
Qualifications
2016

Mark

X747/75/02

**Mathematics
Paper 2**

THURSDAY, 12 MAY

2:20 PM – 3:50 PM



* X 7 4 7 7 5 0 2 *

Fill in these boxes and read what is printed below.

Full name of centre

Town

Forename(s)

Surname

Number of seat

Date of birth

Day

Month

Year

Scottish candidate number

Total marks — 50

Attempt ALL questions.

You may use a calculator.

Full credit will be given only to solutions which contain appropriate working.

State the units for your answer where appropriate.

Write your answers clearly in the spaces provided in this booklet. Additional space for answers is provided at the end of this booklet. If you use this space you must clearly identify the question number you are attempting.

Use **blue** or **black** ink.

Before leaving the examination room you must give this booklet to the Invigilator; if you do not, you may lose all the marks for this paper.



* X 7 4 7 7 5 0 2 0 1 *



FORMULAE LIST

The roots of $ax^2 + bx + c = 0$ are $x = \frac{-b \pm \sqrt{(b^2 - 4ac)}}{2a}$

Sine rule: $\frac{a}{\sin A} = \frac{b}{\sin B} = \frac{c}{\sin C}$

Cosine rule: $a^2 = b^2 + c^2 - 2bc \cos A$ or $\cos A = \frac{b^2 + c^2 - a^2}{2bc}$

Area of a triangle: $A = \frac{1}{2}ab \sin C$

Volume of a sphere: $V = \frac{4}{3}\pi r^3$

Volume of a cone: $V = \frac{1}{3}\pi r^2 h$

Volume of a pyramid: $V = \frac{1}{3}Ah$

Standard deviation: $s = \sqrt{\frac{\Sigma(x - \bar{x})^2}{n - 1}}$

or $s = \sqrt{\frac{\Sigma x^2 - \frac{(\Sigma x)^2}{n}}{n - 1}}$, where n is the sample size.



* X 7 4 7 7 5 0 2 0 2 *

Total marks — 50
Attempt ALL questions

1. A drinks manufacturer is reducing the sugar content of one of their fizzy drinks by 8% per year over the next 3 years.

The sugar content of a standard can is currently 35 grams.

Calculate the sugar content of a standard can after 3 years.

3

2. A pollen sample weighs 12 grams and contains 1.5×10^9 pollen grains.



Calculate the weight of one pollen grain in grams.

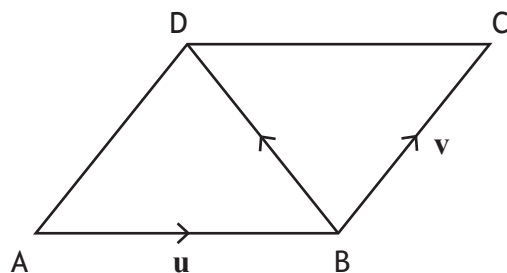
Give your answer in scientific notation.

2



* X 7 4 7 7 5 0 2 0 3 *

3. The diagram below shows parallelogram ABCD.



\vec{AB} represents vector \mathbf{u} and \vec{BC} represents vector \mathbf{v} .

Express \vec{BD} in terms of \mathbf{u} and \mathbf{v} .

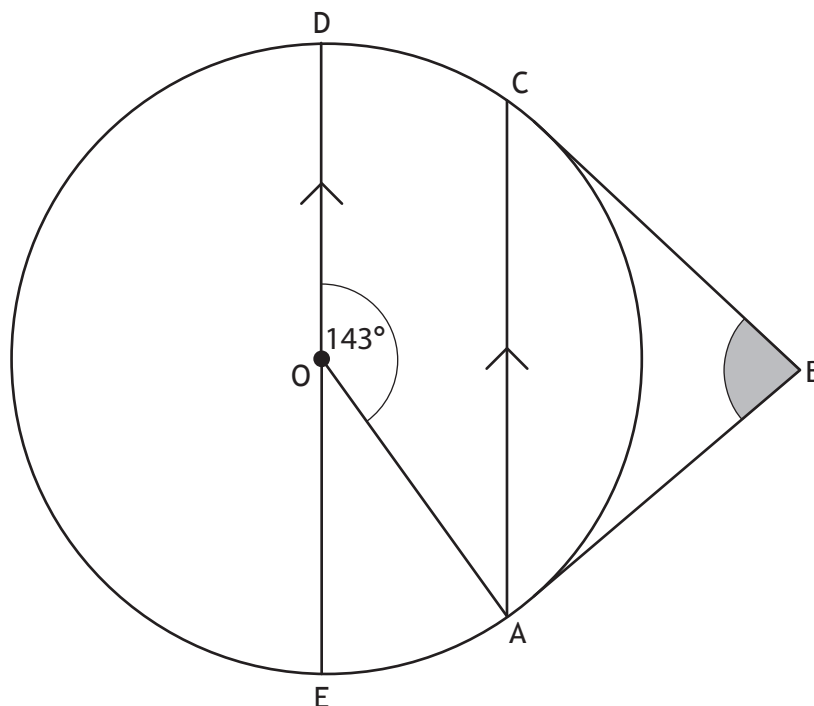
1

4. Factorise fully $3x^2 - 48$.

2



5. The diagram below shows a circle, centre O.



- AB and CB are tangents to the circle.
- AC and ED are parallel.
- Angle AOD is 143° .

Calculate the size of angle ABC.

3



6. Jack called his internet provider on six occasions to report connection problems.

On each occasion he noted the length of time he had to wait before speaking to an adviser.

The times (in minutes) were as follows:

13 16 10 22 5 12

- (a) Calculate the mean and standard deviation of these times.

4



* X 7 4 7 7 5 0 2 0 6 *

6. (continued)

- (b) Sophie also called the same internet provider, on several occasions, to report connection problems.

Her mean waiting time was 15 minutes and the standard deviation was 4.3 minutes.

Make two valid comments comparing Sophie's waiting times with Jack's waiting times.

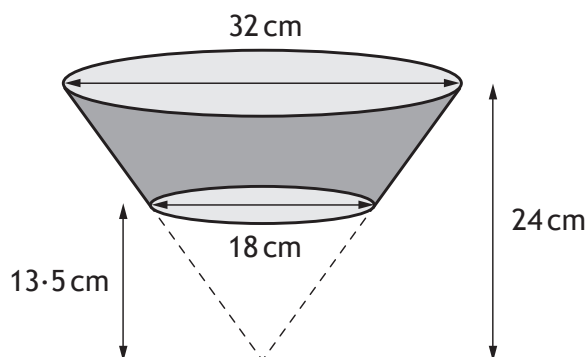
2

[Turn over



* X 7 4 7 7 5 0 2 0 7 *

7. A carton is in the shape of a large cone with a small cone removed. The large cone has diameter of 32 cm and height 24 cm. The small cone has diameter of 18 cm and height 13.5 cm.



Calculate the volume of the carton.

Give your answer correct to 2 significant figures.

5

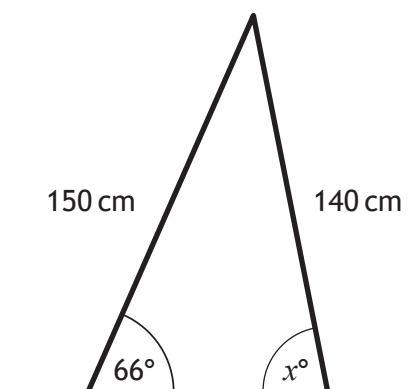


* X 7 4 7 7 5 0 2 0 8 *

8. A set of stepladders has legs 150 centimetres and 140 centimetres long.



When the stepladder is fully open, the angle between the longer leg and the ground is 66° .



Calculate x° , the size of the angle between the shorter leg and the ground.

3



* X 7 4 7 7 5 0 2 0 9 *

MARKS

DO NOT
WRITE IN
THIS
MARGIN

9. Express $x^2 + 8x - 7$ in the form $(x + a)^2 + b$.

2

10. Simplify $(n^2)^3 \times n^{-10}$.

Give your answer with a **positive** power.

3



* X 7 4 7 7 5 0 2 1 0 *

11. Two pictures are mathematically similar in shape.



100 cm



60 cm

The cost of each picture is proportional to its area.

The large picture costs £13.75.

Find the cost of the small picture.

3



12. Change the subject of the formula $L = \sqrt{4kt - p}$ to k .

3

13. Express

$$\frac{3}{x-2} + \frac{5}{x+1}, \quad x \neq 2, x \neq -1$$

as a single fraction in its simplest form.

3



MARKS

DO NOT
WRITE IN
THIS
MARGIN

3

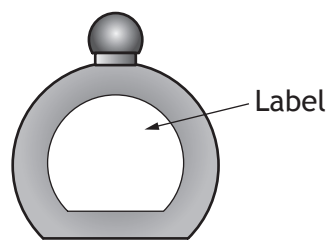
14. Solve the equation $2 \tan x^\circ + 5 = -4$, for $0 \leq x \leq 360$.

[Turn over

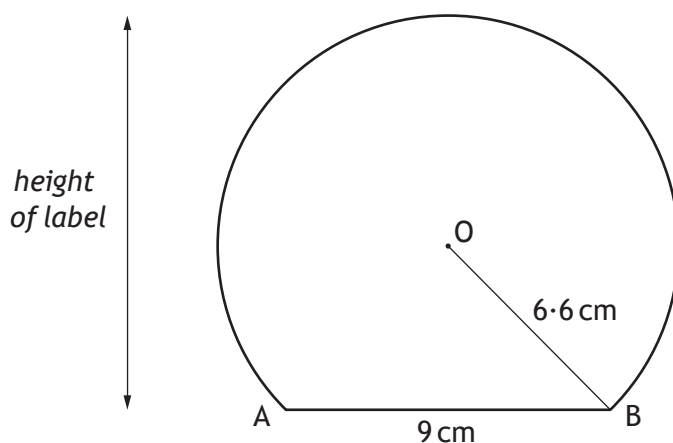


* X 7 4 7 7 5 0 2 1 3 *

15. This perfume bottle has a label in the shape of part of a circle.



A diagram of the label is shown below.



- The centre of the circle is O.
- The chord AB is 9 centimetres.
- The radius OB is 6.6 centimetres.

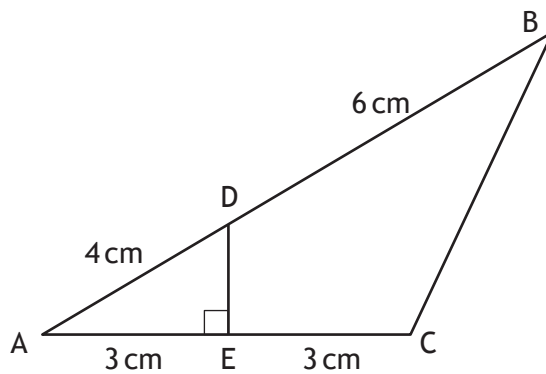
Find the height of the label.

4



16. In the diagram below:

- DE is perpendicular to AC.
- AD = 4 centimetres.
- DB = 6 centimetres.
- AE = EC = 3 centimetres.



Calculate the length of BC.

Give your answer correct to one decimal place.

4

[END OF QUESTION PAPER]



MARKS

DO NOT
WRITE IN
THIS
MARGIN

ADDITIONAL SPACE FOR ANSWERS



* X 7 4 7 7 5 0 2 1 6 *

MARKS

DO NOT
WRITE IN
THIS
MARGIN

ADDITIONAL SPACE FOR ANSWERS



* X 7 4 7 7 5 0 2 1 7 *

MARKS

DO NOT
WRITE IN
THIS
MARGIN

ADDITIONAL SPACE FOR ANSWERS



* X 7 4 7 7 5 0 2 1 8 *

MARKS

DO NOT
WRITE IN
THIS
MARGIN

ADDITIONAL SPACE FOR ANSWERS



* X 7 4 7 7 5 0 2 1 9 *

MARKS

DO NOT
WRITE IN
THIS
MARGIN

ADDITIONAL SPACE FOR ANSWERS



* X 7 4 7 7 5 0 2 2 0 *